
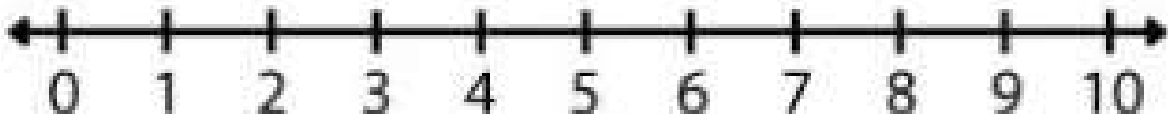
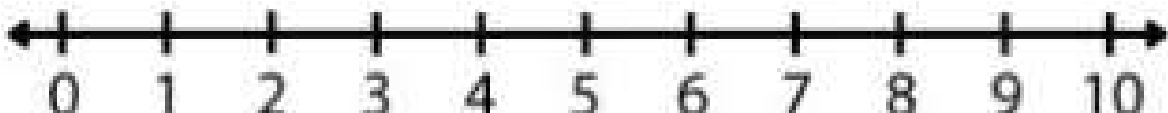



# Number Bonds of 10 with Number Lines


Use the number lines to answer the math questions below. You can circle or highlight the answer on the number line.


$10-3=\square$  A horizontal number line with arrows at both ends, marked with integers from 0 to 10.


$10-5=\square$  A horizontal number line with arrows at both ends, marked with integers from 0 to 10.


$10-1=\square$  A horizontal number line with arrows at both ends, marked with integers from 0 to 10.


$4+\square=10$  A horizontal number line with arrows at both ends, marked with integers from 0 to 10.

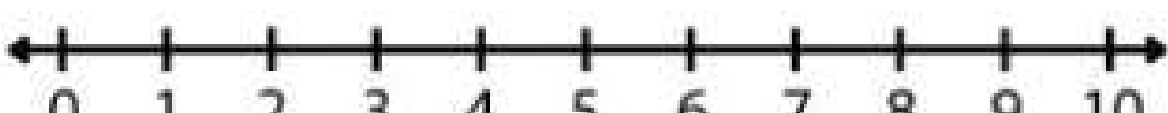
$8+\square=10$  A horizontal number line with arrows at both ends, marked with integers from 0 to 10.

$10-2=\square$  A horizontal number line with arrows at both ends, marked with integers from 0 to 10.

$10-4=\square$  A horizontal number line with arrows at both ends, marked with integers from 0 to 10.

$9+\square=10$  A horizontal number line with arrows at both ends, marked with integers from 0 to 10.

$5+\square=10$  A horizontal number line with arrows at both ends, marked with integers from 0 to 10.

$7+\square=10$  A horizontal number line with arrows at both ends, marked with integers from 0 to 10.